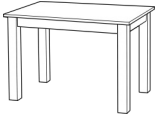










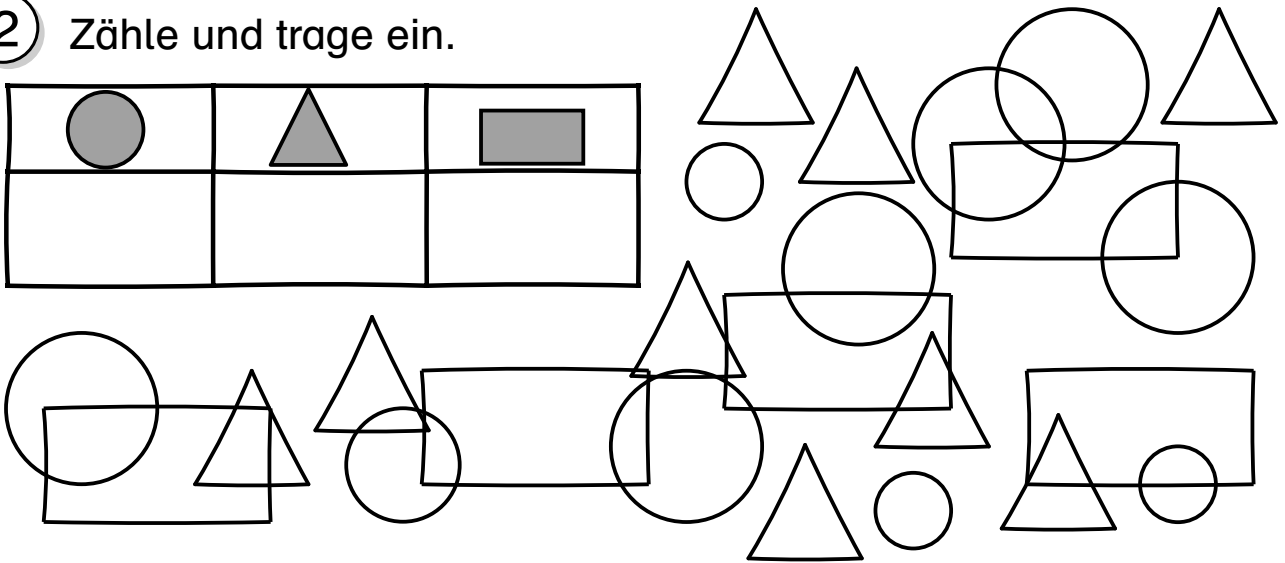
# Übungsaufgaben

1 Kreuze an.









					
rund					
eckig					

2 Zähle und trage ein.


		



3 Setze das Muster fort.





4 Rechne.




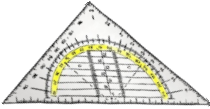










$16 - 1 = \underline{\quad}$	$1 + 10 = \underline{\quad}$
$9 + 11 = \underline{\quad}$	$20 - 10 = \underline{\quad}$
$12 - 2 = \underline{\quad}$	$16 - 1 = \underline{\quad}$
$13 + 5 = \underline{\quad}$	$2 + 18 = \underline{\quad}$

5

Welche Form ist es? Schneide die Bilder aus und klebe sie in die richtige Spalte.

 Quadrat	 Rechteck	 Kreis	 Dreieck



6) Rechne.

$17 + 2 = \square$

$13 - 3 = \square$

$14 - 1 = \square$

$19 + 2 = \square$

$16 - 4 = \square$

$15 + 2 = \square$

$12 + 7 = \square$


$18 - 5 = \square$

$19 - 6 = \square$

$11 + 4 = \square$

$20 - 9 = \square$

$17 + 3 = \square$



$7 + 2 = \square$

$5 - 2 = \square$

$\square + \square = \square$

$\square - \square = \square$

$2 + 5 = \square$

$6 - 3 = \square$

$\square + \square = \square$

$\square - \square = \square$

$4 + 4 = \square$

$9 - 8 = \square$

$\square + \square = \square$

$\square - \square = \square$

